

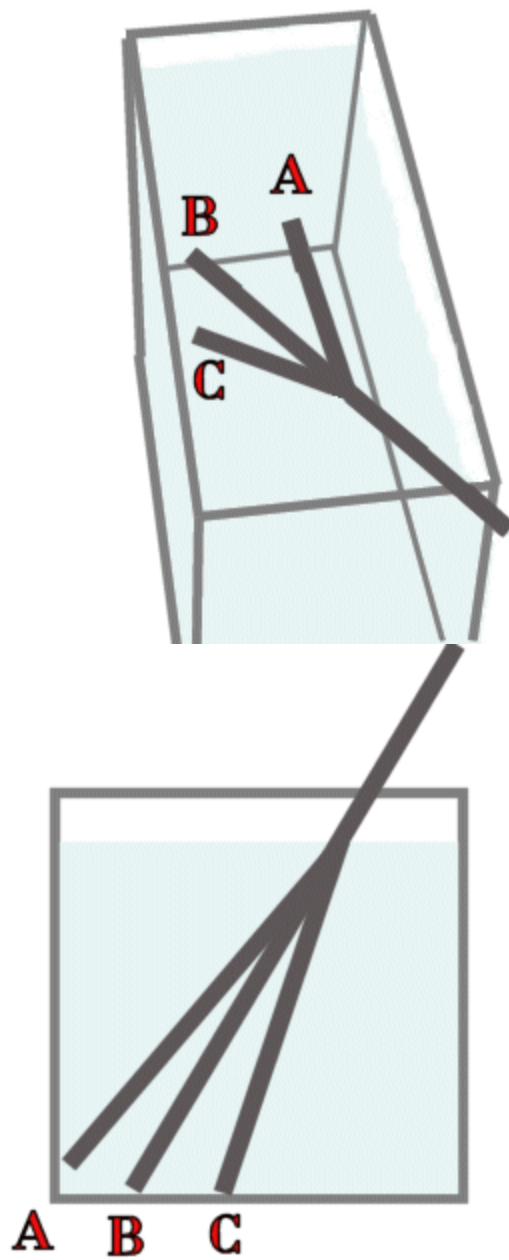


Question #288

Shown in the photographs below are a top view and a side view of an aluminum rod with much of the rod inserted into a tank of water. The only problem with these photographs is that the part of the photograph showing the rod in the water has been masked out.



The drawings below show three different versions of how the photographs might appear if the mask were not present. Your task is to identify which of the three options for each view is correct.



The correct top view of the rod in the water tank is:

- (a) A
- (b) B
- (c) C

The correct side view of the rod in the water tank is:

- (a) A
- (b) B
- (c) C

Click here for [Answer #288](#) after September 10, 2007.

[Question of the Week](#)

[Outreach Index Page](#)

[Lecture-Demonstration Home Page](#)



For questions and comments regarding the *Question of the Week* contact [Dr. Richard E. Berg](#) by e-mail or using phone number or regular mail address given on the [Lecture-Demonstration Home Page](#).